

NON-VERBAL REASONING

CODES

Paper 1

Intermediate Level

Read the following instructions carefully:

1. The test has 20 questions in total and you have 10 minutes to complete it.
2. This is a multiple-choice test.
3. Work as carefully and as quickly as you can.
4. Answers should be marked on the answer sheet provided and not on this paper.
5. If you make a mistake, rub it out completely and put in your new answer.

Good Luck!



CODES

Instructions:

The following Shapes correspond to the codes below them. Decide how the code letters go with the Shapes and then find the correct code for the Test Shape.

Example:

						BC	AE	ED	EC	CA
AB	AC	CD	BE		?	A	B	C	D	E

Answer:


























Example
A <input style="width: 30px;" type="text"/>
B <input style="width: 30px;" type="text"/>
C <input style="width: 30px;" type="text"/>
D <input style="width: 30px;" type="text"/>
E <input style="width: 30px;" type="text"/>

ED
C

Explanation:



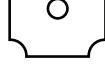


- A - circle
- B - heart
- C - spade
- D - square
- E - star

CODES

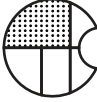




1	   		<p>BD CF AE CE BF</p> <p>A B C D E</p>
2	   		<p>KM KN HM JL JN</p> <p>A B C D E</p>
3	   		<p>PU PS OT RT RU</p> <p>A B C D E</p>
4	   		<p>VZ WZ WY UY UX</p> <p>A B C D E</p>
5	   		<p>CF CD BD AE AF</p> <p>A B C D E</p>

CODES






6

						HM	JM	JN	KM	KN
HL	KM	JL	HN		?	A	B	C	D	E

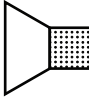

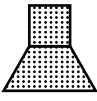
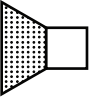

7

						RS	RU	PU	PT	OT
OS	RT	OU	PV		?	A	B	C	D	E






8

						XA	YZ	XB	YB	WZ
XZ	YA	WB	WA		?	A	B	C	D	E


























9

						CH	DK	DF	EH	EK
CK	DH	EF	CH		?	A	B	C	D	E

10

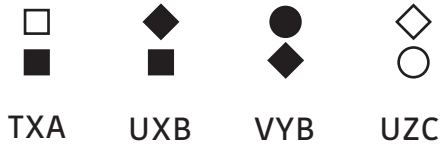
						LP	MR	NP	NR	MO
LO	MP	LR	NO		?	A	B	C	D	E

CODES

11	 ZDF	 ZCH	 AEK	 BCF		 ?	ACH A	BDK B	ADH C	BEF D	ZEF E
12	 LOR	 MOS	 NPT	 MPR		 ?	LPS A	NPR B	MOR C	NOS D	MPR E
13	 UY	 VX	 UX	 WZ		 ?	UY A	WX B	WY C	VZ D	VY E
14	 AD	 BD	 CE	 CF		 ?	AF A	AE B	CD C	BF D	BE E
15	 HMP	 LNP	 KMR	 HOS		 ?	KOP A	LMS B	KNS C	LOS D	HMP E

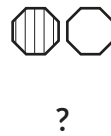
CODES

16



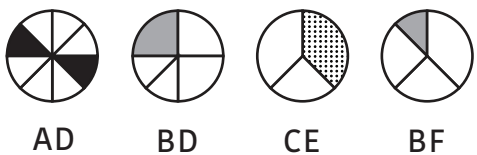
VYC TZB VZA TYA UYA
 A B C D E

17



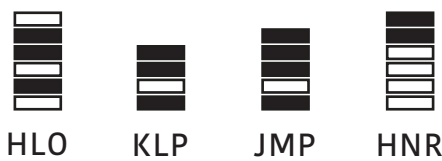
JF JE HF KD KE
 A B C D E

18



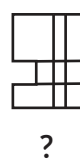
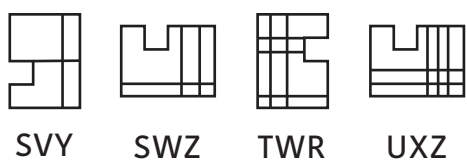
AF BE AE CF CD
 A B C D E

19



JLR HNP JNO KMO KNO
 A B C D E

20



UWY UVY SXR TXZ TWR
 A B C D E

NON-VERBAL REASONING

CODES

Paper 1 : Intermediate Level

ANSWER SHEET

Pupil's name:	Date of test:
School name:	Date of birth:

Instructions:

Mark your answers like this: A

Example	Q1	Q2	Q3	Q4	Q5	Q6	Q7	Q8	Q9	Q10
A <input style="width: 40px; height: 15px; border: 1px solid black;" type="text"/>	A <input style="width: 40px; height: 15px; border: 1px solid black;" type="text"/>	A <input style="width: 40px; height: 15px; border: 1px solid black;" type="text"/>	A <input style="width: 40px; height: 15px; border: 1px solid black;" type="text"/>	A <input style="width: 40px; height: 15px; border: 1px solid black;" type="text"/>	A <input style="width: 40px; height: 15px; border: 1px solid black;" type="text"/>	A <input style="width: 40px; height: 15px; border: 1px solid black;" type="text"/>	A <input style="width: 40px; height: 15px; border: 1px solid black;" type="text"/>	A <input style="width: 40px; height: 15px; border: 1px solid black;" type="text"/>	A <input style="width: 40px; height: 15px; border: 1px solid black;" type="text"/>	A <input style="width: 40px; height: 15px; border: 1px solid black;" type="text"/>
B <input style="width: 40px; height: 15px; border: 1px solid black;" type="text"/>	B <input style="width: 40px; height: 15px; border: 1px solid black;" type="text"/>	B <input style="width: 40px; height: 15px; border: 1px solid black;" type="text"/>	B <input style="width: 40px; height: 15px; border: 1px solid black;" type="text"/>	B <input style="width: 40px; height: 15px; border: 1px solid black;" type="text"/>	B <input style="width: 40px; height: 15px; border: 1px solid black;" type="text"/>	B <input style="width: 40px; height: 15px; border: 1px solid black;" type="text"/>	B <input style="width: 40px; height: 15px; border: 1px solid black;" type="text"/>	B <input style="width: 40px; height: 15px; border: 1px solid black;" type="text"/>	B <input style="width: 40px; height: 15px; border: 1px solid black;" type="text"/>	B <input style="width: 40px; height: 15px; border: 1px solid black;" type="text"/>
C <input style="width: 40px; height: 15px; border: 1px solid black; background-color: #cccccc;" type="text"/>	C <input style="width: 40px; height: 15px; border: 1px solid black;" type="text"/>	C <input style="width: 40px; height: 15px; border: 1px solid black;" type="text"/>	C <input style="width: 40px; height: 15px; border: 1px solid black;" type="text"/>	C <input style="width: 40px; height: 15px; border: 1px solid black;" type="text"/>	C <input style="width: 40px; height: 15px; border: 1px solid black;" type="text"/>	C <input style="width: 40px; height: 15px; border: 1px solid black;" type="text"/>	C <input style="width: 40px; height: 15px; border: 1px solid black;" type="text"/>	C <input style="width: 40px; height: 15px; border: 1px solid black;" type="text"/>	C <input style="width: 40px; height: 15px; border: 1px solid black;" type="text"/>	C <input style="width: 40px; height: 15px; border: 1px solid black;" type="text"/>
D <input style="width: 40px; height: 15px; border: 1px solid black;" type="text"/>	D <input style="width: 40px; height: 15px; border: 1px solid black;" type="text"/>	D <input style="width: 40px; height: 15px; border: 1px solid black;" type="text"/>	D <input style="width: 40px; height: 15px; border: 1px solid black;" type="text"/>	D <input style="width: 40px; height: 15px; border: 1px solid black;" type="text"/>	D <input style="width: 40px; height: 15px; border: 1px solid black;" type="text"/>	D <input style="width: 40px; height: 15px; border: 1px solid black;" type="text"/>	D <input style="width: 40px; height: 15px; border: 1px solid black;" type="text"/>	D <input style="width: 40px; height: 15px; border: 1px solid black;" type="text"/>	D <input style="width: 40px; height: 15px; border: 1px solid black;" type="text"/>	D <input style="width: 40px; height: 15px; border: 1px solid black;" type="text"/>
E <input style="width: 40px; height: 15px; border: 1px solid black;" type="text"/>	E <input style="width: 40px; height: 15px; border: 1px solid black;" type="text"/>	E <input style="width: 40px; height: 15px; border: 1px solid black;" type="text"/>	E <input style="width: 40px; height: 15px; border: 1px solid black;" type="text"/>	E <input style="width: 40px; height: 15px; border: 1px solid black;" type="text"/>	E <input style="width: 40px; height: 15px; border: 1px solid black;" type="text"/>	E <input style="width: 40px; height: 15px; border: 1px solid black;" type="text"/>	E <input style="width: 40px; height: 15px; border: 1px solid black;" type="text"/>	E <input style="width: 40px; height: 15px; border: 1px solid black;" type="text"/>	E <input style="width: 40px; height: 15px; border: 1px solid black;" type="text"/>	E <input style="width: 40px; height: 15px; border: 1px solid black;" type="text"/>

Q11	Q12	Q13	Q14	Q15	Q16	Q17	Q18	Q19	Q20
A <input style="width: 40px; height: 15px; border: 1px solid black;" type="text"/>	A <input style="width: 40px; height: 15px; border: 1px solid black;" type="text"/>	A <input style="width: 40px; height: 15px; border: 1px solid black;" type="text"/>	A <input style="width: 40px; height: 15px; border: 1px solid black;" type="text"/>	A <input style="width: 40px; height: 15px; border: 1px solid black;" type="text"/>	A <input style="width: 40px; height: 15px; border: 1px solid black;" type="text"/>	A <input style="width: 40px; height: 15px; border: 1px solid black;" type="text"/>	A <input style="width: 40px; height: 15px; border: 1px solid black;" type="text"/>	A <input style="width: 40px; height: 15px; border: 1px solid black;" type="text"/>	A <input style="width: 40px; height: 15px; border: 1px solid black;" type="text"/>
B <input style="width: 40px; height: 15px; border: 1px solid black;" type="text"/>	B <input style="width: 40px; height: 15px; border: 1px solid black;" type="text"/>	B <input style="width: 40px; height: 15px; border: 1px solid black;" type="text"/>	B <input style="width: 40px; height: 15px; border: 1px solid black;" type="text"/>	B <input style="width: 40px; height: 15px; border: 1px solid black;" type="text"/>	B <input style="width: 40px; height: 15px; border: 1px solid black;" type="text"/>	B <input style="width: 40px; height: 15px; border: 1px solid black;" type="text"/>	B <input style="width: 40px; height: 15px; border: 1px solid black;" type="text"/>	B <input style="width: 40px; height: 15px; border: 1px solid black;" type="text"/>	B <input style="width: 40px; height: 15px; border: 1px solid black;" type="text"/>
C <input style="width: 40px; height: 15px; border: 1px solid black;" type="text"/>	C <input style="width: 40px; height: 15px; border: 1px solid black;" type="text"/>	C <input style="width: 40px; height: 15px; border: 1px solid black;" type="text"/>	C <input style="width: 40px; height: 15px; border: 1px solid black;" type="text"/>	C <input style="width: 40px; height: 15px; border: 1px solid black;" type="text"/>	C <input style="width: 40px; height: 15px; border: 1px solid black;" type="text"/>	C <input style="width: 40px; height: 15px; border: 1px solid black;" type="text"/>	C <input style="width: 40px; height: 15px; border: 1px solid black;" type="text"/>	C <input style="width: 40px; height: 15px; border: 1px solid black;" type="text"/>	C <input style="width: 40px; height: 15px; border: 1px solid black;" type="text"/>
D <input style="width: 40px; height: 15px; border: 1px solid black;" type="text"/>	D <input style="width: 40px; height: 15px; border: 1px solid black;" type="text"/>	D <input style="width: 40px; height: 15px; border: 1px solid black;" type="text"/>	D <input style="width: 40px; height: 15px; border: 1px solid black;" type="text"/>	D <input style="width: 40px; height: 15px; border: 1px solid black;" type="text"/>	D <input style="width: 40px; height: 15px; border: 1px solid black;" type="text"/>	D <input style="width: 40px; height: 15px; border: 1px solid black;" type="text"/>	D <input style="width: 40px; height: 15px; border: 1px solid black;" type="text"/>	D <input style="width: 40px; height: 15px; border: 1px solid black;" type="text"/>	D <input style="width: 40px; height: 15px; border: 1px solid black;" type="text"/>
E <input style="width: 40px; height: 15px; border: 1px solid black;" type="text"/>	E <input style="width: 40px; height: 15px; border: 1px solid black;" type="text"/>	E <input style="width: 40px; height: 15px; border: 1px solid black;" type="text"/>	E <input style="width: 40px; height: 15px; border: 1px solid black;" type="text"/>	E <input style="width: 40px; height: 15px; border: 1px solid black;" type="text"/>	E <input style="width: 40px; height: 15px; border: 1px solid black;" type="text"/>	E <input style="width: 40px; height: 15px; border: 1px solid black;" type="text"/>	E <input style="width: 40px; height: 15px; border: 1px solid black;" type="text"/>	E <input style="width: 40px; height: 15px; border: 1px solid black;" type="text"/>	E <input style="width: 40px; height: 15px; border: 1px solid black;" type="text"/>

THE END