



**THE PERSE**  
PREP SCHOOL  
CAMBRIDGE

Year 3 Entrance Tests

Specimen papers and guidance

# Maths specimen paper

1. Write the following numbers in order.

85

57

73

32

61

49

Write the numbers in order

smallest

largest

2. Write the missing numbers in the boxes.

3.  $16 + 7 =$

4. In a box there are 9 red bean bags, 6 yellow bean bags and 5 blue bean bags. How many bean bags are there altogether?

Answer:

bean bags

5.  $43 + 51 =$

6.  $48 + 65 =$

7. What is 5 more than 97?

8. Write these words in numbers.

Sixty-eight

One hundred and fifty

Seven hundred and six

9. David had 20 marbles but lost 4. How many has he left?

Answer:  marbles

10.  $14 - \boxed{\phantom{00}} = 6$

11.  $56 - 23 = \boxed{\phantom{00}}$

12.  $72 - 37 = \boxed{\phantom{00}}$

13. In a school there are 401 children. During the year 5 children leave. How many children are left in the school?

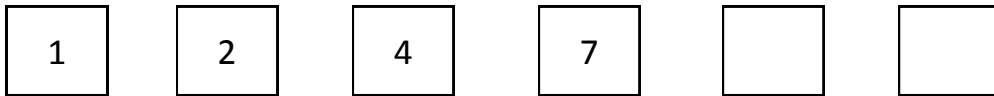
Answer:  children

14. Look at these numbers

9      11      18      7      12      20

Draw a circle around each even number.

15. What are the next two numbers?



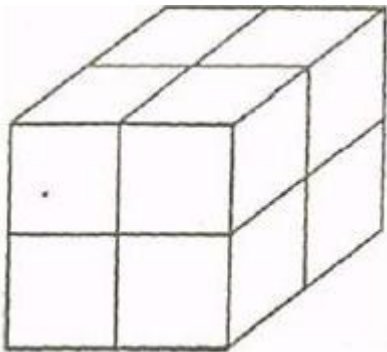
16. Which two numbers make 1000?

**200    600    350    450    500    550**

17. If a pencil costs 26p, which three coins would you use to pay for it?

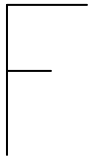
.....

18.

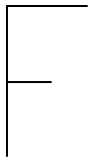
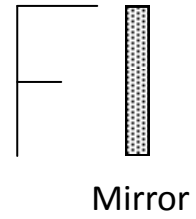


This box shape, or cuboid, is built with small red bricks like this. How many of the small bricks are needed?

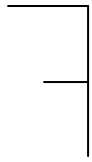
.....

19.  is held in front of a mirror.

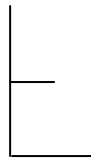
Which shape will be seen, A, B, C or D?



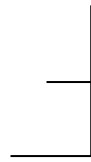
A



B



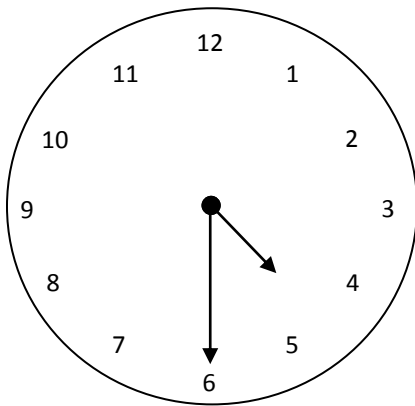
C



D

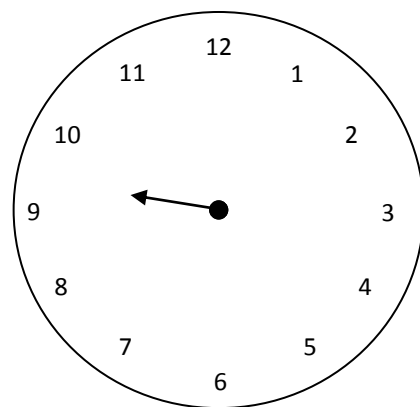


20.



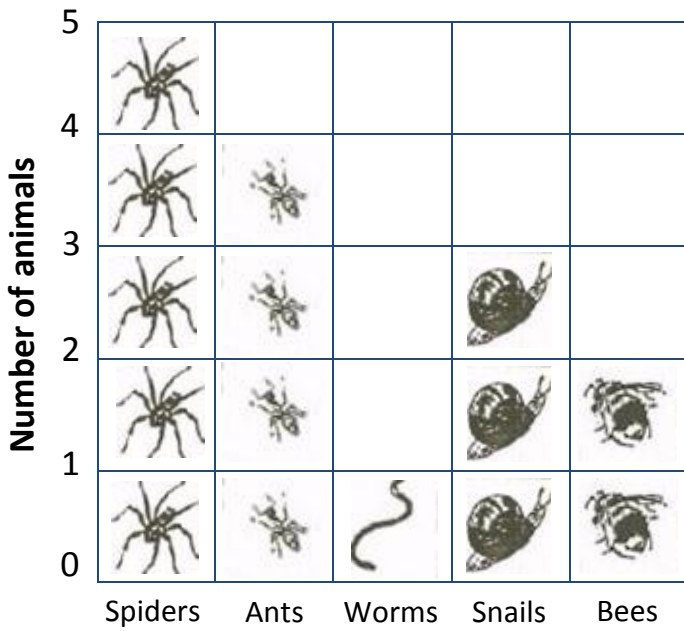
$\frac{1}{2}$  past   
2

Draw  $\frac{1}{4}$  past 9.



21.

**Graph of animals**



a. How many spiders are there?

\_\_\_\_\_

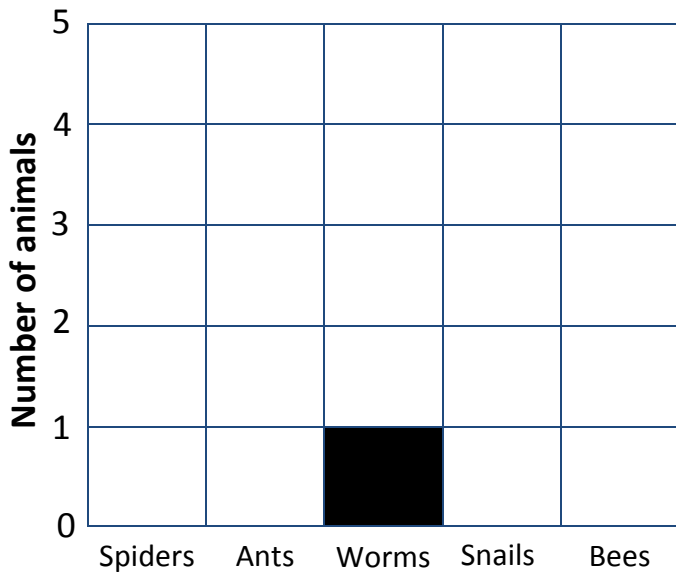
b. How many snails are there?

\_\_\_\_\_

c. How many more ants than bees are there?

\_\_\_\_\_

d. Draw a block graph like this.



**Animals**