

2017 national curriculum tests

Key stage 2

Mathematics

Paper 2: reasoning

First name						
Middle name						
Last name						
Date of birth	Day		Month		Year	
School name						
DfE number						



F 0 0 0 7 0 A 0 1 2 4

[BLANK PAGE]

Please do not write on this page.



Instructions

You **must not** use a calculator to answer any questions in this test.

Questions and answers

You have **40 minutes** to complete this test.

Follow the instructions for each question.

Work as quickly and as carefully as you can.

If you need to do working out, you can use the space around the question.

Do not write over any barcodes.

Some questions have a method box like this:

Show your method

For these questions, you may get a mark for showing your method.

If you cannot do a question, **go on to the next one**.

You can come back to it later, if you have time.

If you finish before the end, **go back and check your work**.

Marks

The number under each line at the side of the page tells you the maximum number of marks for each question.

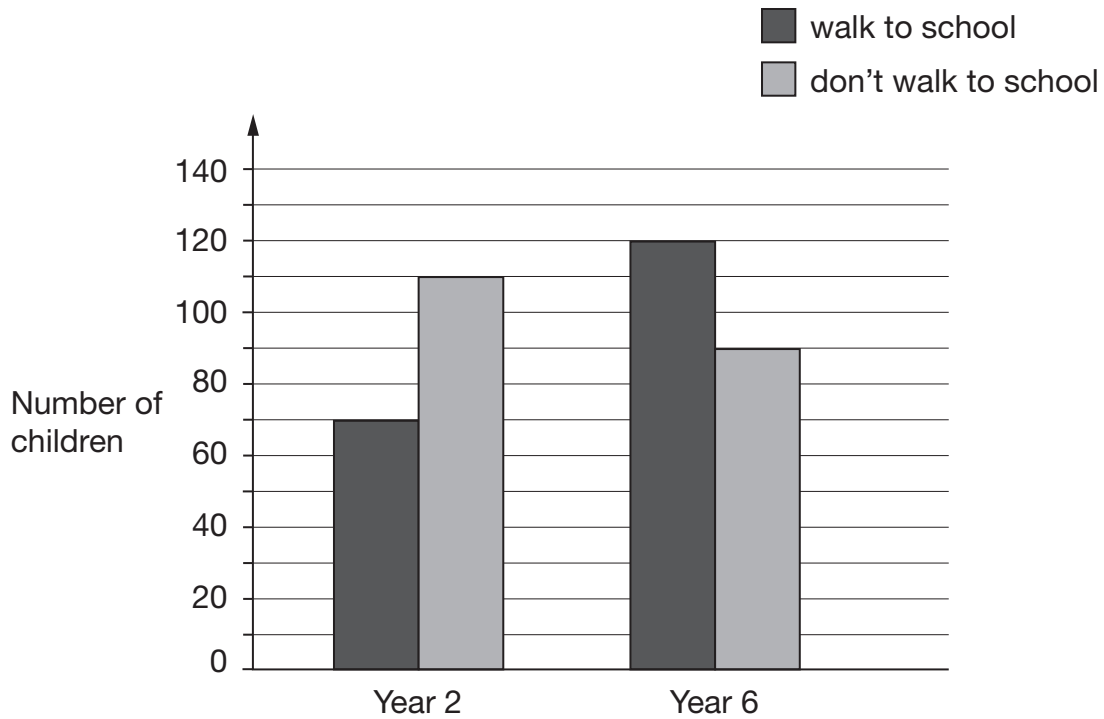


F 0 0 0 7 0 A 0 3 2 4

1

William asks the children in Year 2 and Year 6 if they walk to school.

This graph shows the results.



Altogether, how many children **don't** walk to school?

1 mark

How many **more** Year 6 children than Year 2 children walk to school?

1 mark



2

Circle the number that is **10 times** greater than nine hundred and seven.

9,700

907

9,007

970

9,070

1 mark

3

Write the missing numbers to make this **multiplication** grid correct.

	×	<input type="text"/>	<input type="text"/>
<input type="text"/>	9	63	54
<input type="text"/>		56	48

1 mark



F 0 0 0 7 0 A 0 5 2 4

4

This table shows the heights of three mountains.

Mountain	Height in metres
Mount Everest	8,848
Mount Kilimanjaro	5,895
Ben Nevis	1,344

How much higher is Mount Everest than the combined height of the other two mountains?

Show
your
method

A large grid for showing the method. A small box on the right side of the grid contains the letter 'm'.

2 marks



5

Complete this table with the missing numbers.

One row has been done for you.

Number	1,000 more
3,500	4,500
85	
	9,099
	15,250

2 marks

F 0 0 0 7 0 A 0 7 2 4

6

Write these numbers in order of size, starting with the **smallest**.

1.9

0.96

1.253

0.328

smallest

1 mark

7

Write the missing numbers.

60 months =

years

72 hours =

days

84 days =

weeks

2 marks



8

At the start of June, there were 1,793 toy cars in the shop.

During June,

- 8,728 more toy cars were delivered
- 9,473 toy cars were sold.

How many toy cars were left in the shop at the end of June?

Show
your
method

The grid is 20 units wide and 10 units high. A small rectangular box is drawn in the bottom right corner, spanning 4 units in width and 2 units in height.

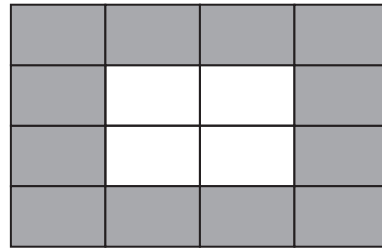
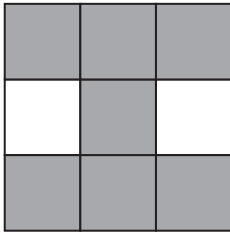
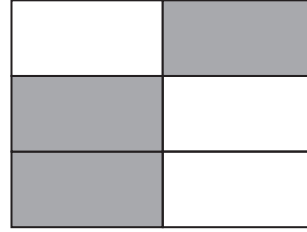
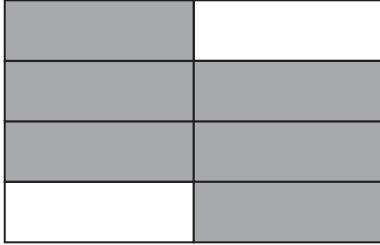
2 marks



F 0 0 0 7 0 A 0 9 2 4

9

Tick two shapes that have $\frac{3}{4}$ shaded.



1 mark



10

Round **84,516**

to the nearest 10

to the nearest 100

to the nearest 1,000

2 marks



F 0 0 0 7 0 A 0 1 1 2 4

11

Here is a rule for the time it takes to cook a chicken.

**Cooking time = 20 minutes plus an extra
40 minutes for each kilogram**

How many minutes will it take to cook a 3 kg chicken?

minutes

1 mark

What is the mass of a chicken that takes 100 minutes to cook?

kg

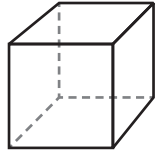
1 mark



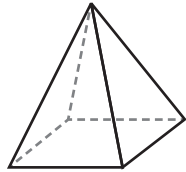
12

Here are diagrams of some 3-D shapes.

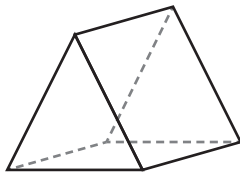
Tick each shape that has the same number of faces as vertices.



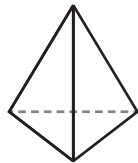
Cube



Square-based pyramid



Triangular prism



Triangular-based pyramid

2 marks



F 0 0 0 7 0 A 0 1 3 2 4

14

Amina planted some seeds.

For every 3 seeds Amina planted, only 2 seeds grew.

Altogether, 12 seeds grew.

How many seeds did Amina **plant**?

1 mark

15

At the end of a film, the year is given in Roman numerals.




Write the year MMVI in **figures**.

1 mark



16

Layla completes one-and-a-half somersaults in a dive.



How many **degrees** does Layla turn through in her dive?

1 mark



17

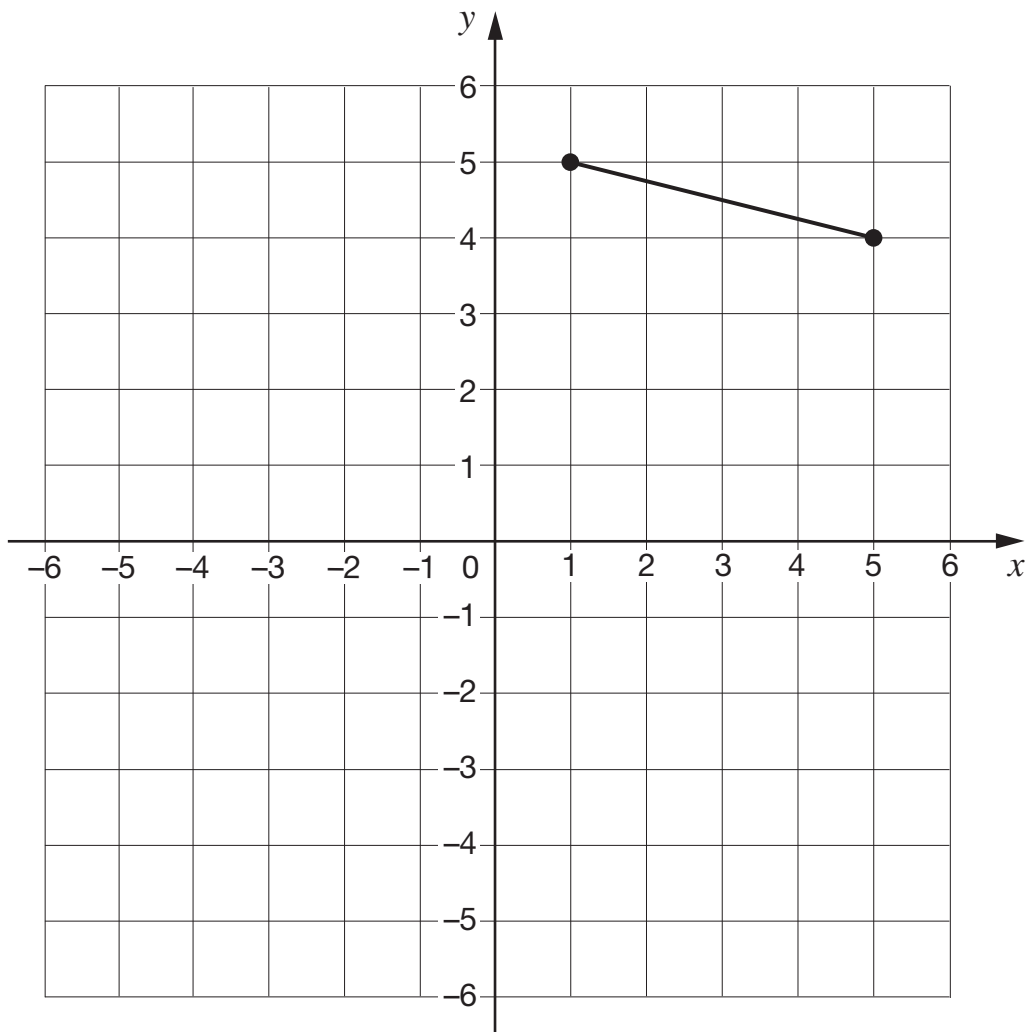
The vertices of a quadrilateral have these coordinates.

(1, 5) (5, 4) (1, -3) (-3, 4)

One side of the quadrilateral has been drawn on the grid.

Complete the quadrilateral.

Use a ruler.



1 mark



F 0 0 0 7 0 A 0 1 7 2 4

18

A cat sleeps for **12 hours** each day.

50% of its life is spent asleep.



Write the missing percentage.

A koala sleeps for **18 hours** each day.

%

of its life is spent asleep.



1 mark



19

Amina posts three large letters.

The postage costs the same for each letter.

She pays with a £20 note.

Her change is £14.96

What is the cost of posting **one** letter?

Show
your
method

A large grid for showing the method of calculation. A small box on the right side of the grid contains the symbol '£'.

2 marks



F 0 0 0 7 0 A 0 1 9 2 4

Adam says,

0.25 is **smaller** than $\frac{2}{5}$



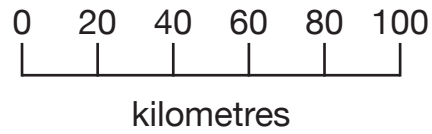
Explain why he is correct.

1 mark



21

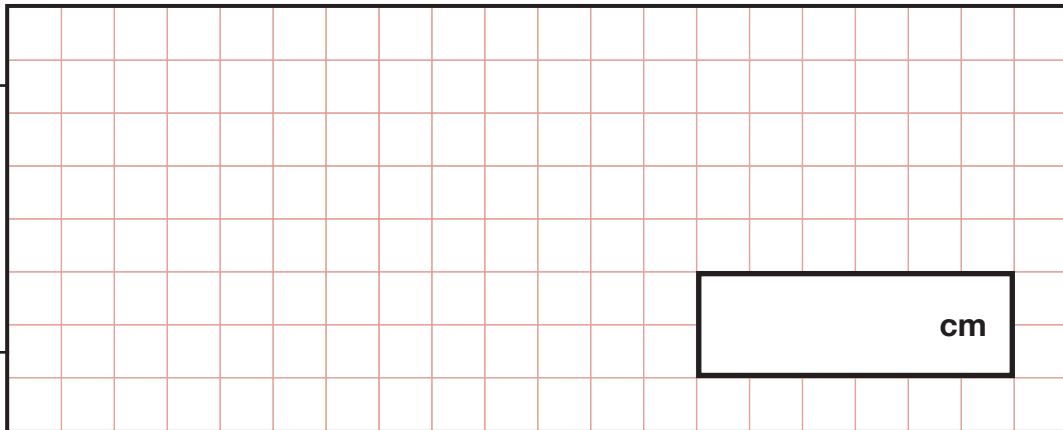
On a map, 1 cm represents 20 km.



The distance between two cities is **250 km**.

On the map, what is the distance between the two cities?

Show
your
method

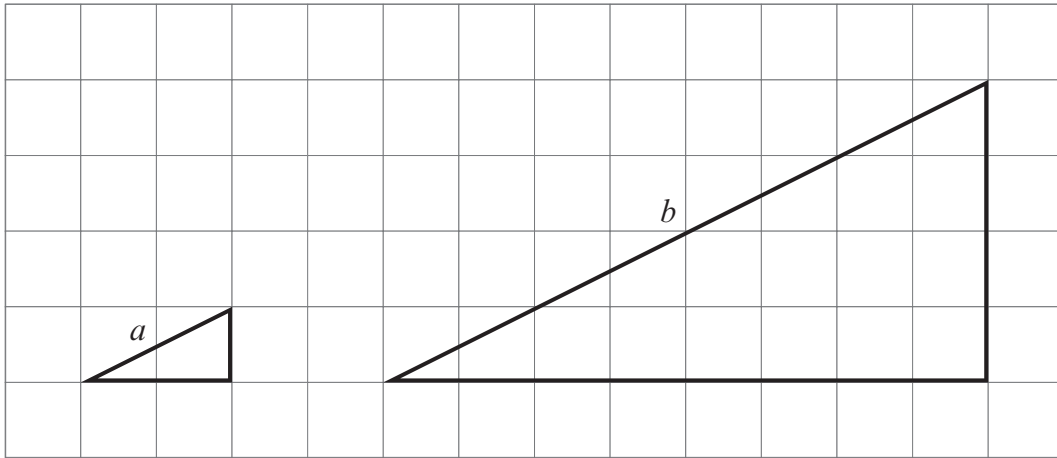


2 marks



22

Here are two similar right-angled triangles.



Write the ratio of side a to side b .

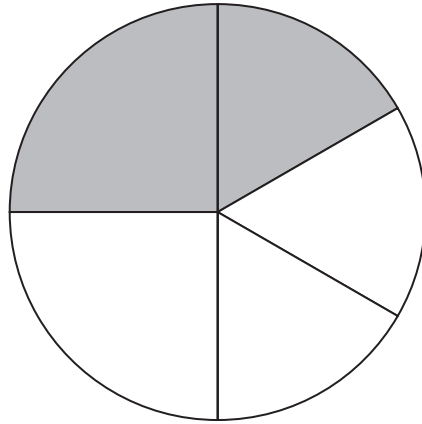
$$a:b = \boxed{\quad : \quad}$$

1 mark



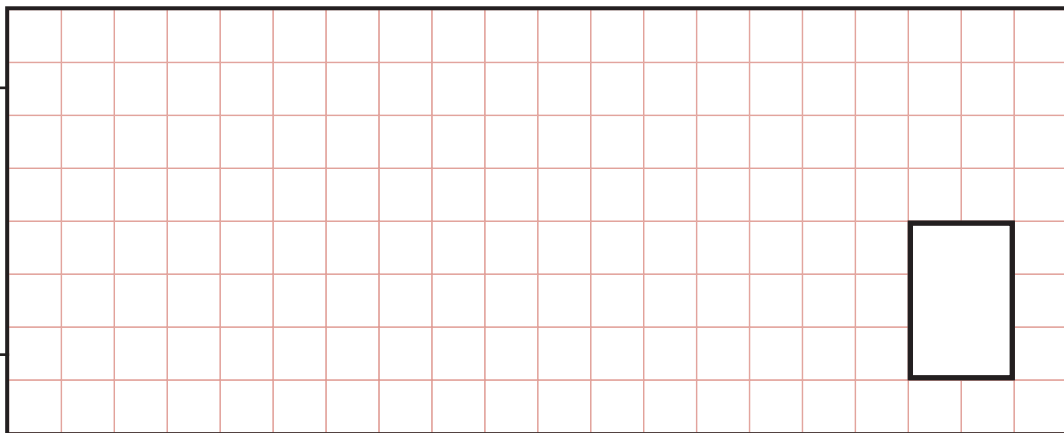
23

In this circle, $\frac{1}{4}$ and $\frac{1}{6}$ are shaded.



What fraction of the whole circle is **not** shaded?

Show
your
method



2 marks



F 0 0 0 7 0 A 0 2 3 2 4



Standards
& Testing
Agency

2017 key stage 2 mathematics

Paper 2: reasoning

Print version product code: STA/17/7737/p ISBN: 978-1-78644-276-5

Electronic PDF version product code: STA/17/7737/e ISBN: 978-1-78644-296-3

For more copies

Additional printed copies of this booklet are not available. It can be downloaded from www.gov.uk/government/publications.

© Crown copyright and Crown information 2017

Re-use of Crown copyright and Crown information in test materials

Subject to the exceptions listed below, the test materials on this website are Crown copyright or Crown information and you may re-use them (not including logos) free of charge in any format or medium in accordance with the terms of the Open Government Licence v3.0 which can be found on the National Archives website and accessed via the following link: www.nationalarchives.gov.uk/doc/open-government-licence.

When you use this information under the Open Government Licence v3.0, you should include the following attribution: 'Contains public sector information licensed under the Open Government Licence v3.0' and where possible provide a link to the licence.



Exceptions – third-party copyright content in test materials

You must obtain permission from the relevant copyright owners, as listed in the '2017 key stage 2 tests copyright report', for re-use of any third-party copyright content which we have identified in the test materials, as listed below. Alternatively you should remove the unlicensed third-party copyright content and/or replace it with appropriately licensed material.

Third-party content

These materials contain no third-party copyright content.

If you have any queries regarding these test materials contact the national curriculum assessments helpline on 0300 303 3013 or email assessments@education.gov.uk.



F 0 0 0 7 0 A 0 2 4 2 4

Sourced from www.11pluscentre.co.uk